









# How Much Do the Ice Creams Cost?

How much does each ice cream cost? Look at the coins and write the total amount in the circle.



# How Much Do the Ice Creams Cost?

How much does each ice cream cost? Look at the coins and write the total amount in the circle.



# How Much Do the Ice Creams Cost?

How much does each ice cream cost? Look at the coins and write the total amount in the circle.

An ice cream cone with three scoops: chocolate, vanilla, and pink. To its right are two coins: a silver 10p coin and a bronze 2p coin. Below the ice cream is a large empty circle for the answer.

An ice cream cone with three scoops: chocolate with a cinnamon stick, vanilla, and pink. To its right are two coins: a silver 10p coin and a bronze 2p coin. Below the ice cream is a large empty circle for the answer.

An ice cream cone with three scoops: chocolate with two cinnamon sticks, vanilla, and pink. To its right are two coins: a silver 10p coin and a silver 2p coin. Below the ice cream is a large empty circle for the answer.

An ice cream cone with three scoops: chocolate with sprinkles and two cinnamon sticks, vanilla with sprinkles, and pink with sprinkles. To its right are two silver 10p coins. Below the ice cream is a large empty circle for the answer.